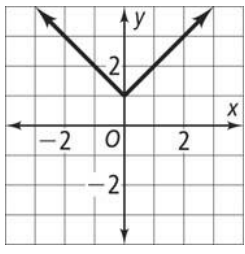
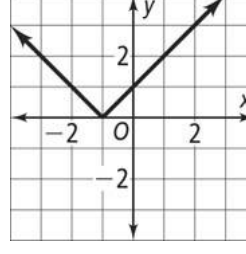
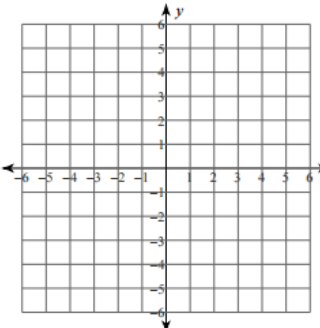
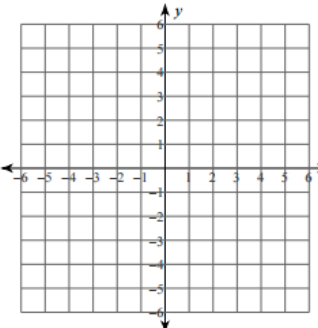
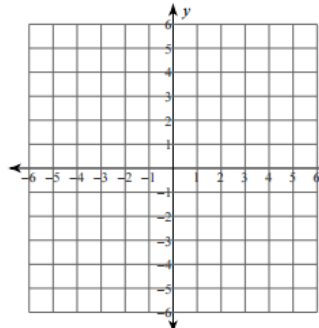
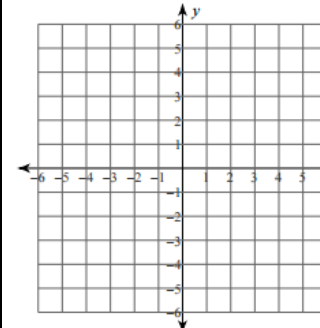
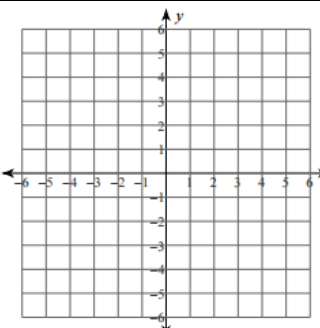
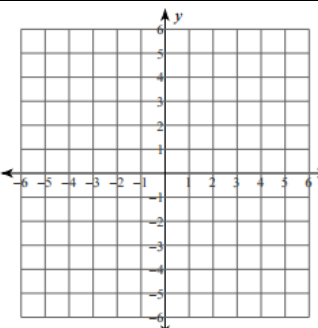
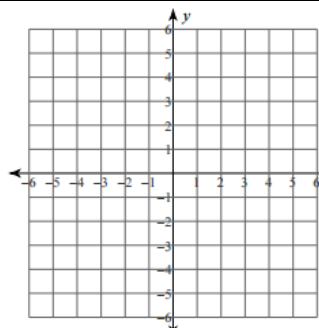
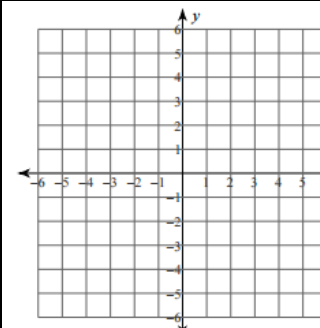
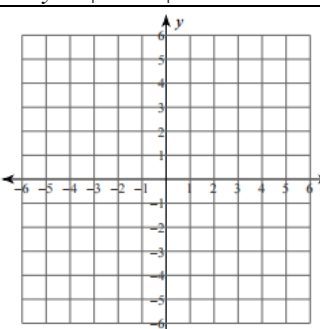
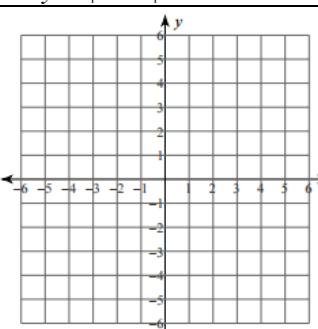
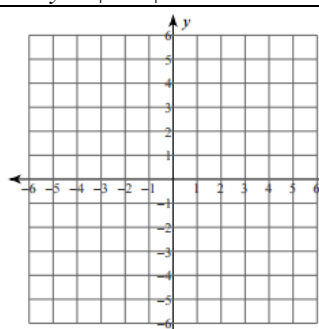
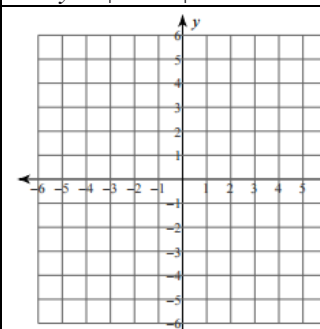
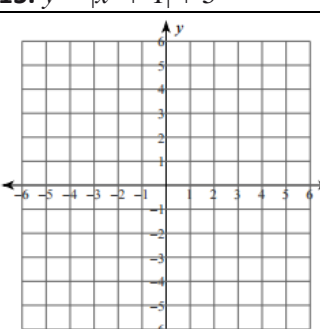
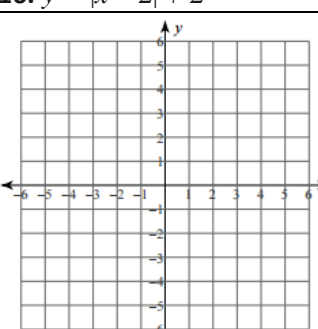
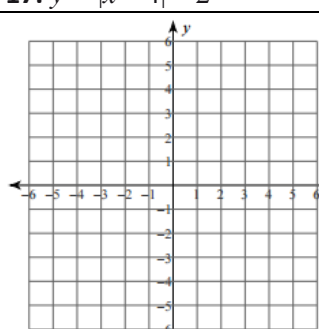


HW 5-8A Graphing & Translating Absolute Value Functions

Describe the Translation from $y = |x|$ & Write the equation

	<p>Question 1 Describe translation: Equation:</p>		<p>Question 2 Describe translation: Equation:</p>
---	---	--	---

Graph the Absolute Value Functions below. Label equation, vertex & describe translation

<p>3. $y = x/ + 2$</p> 	<p>4. $y = x/- 5$</p> 	<p>5. $y = x / - 3$</p> 	<p>6. $y = x / + 1.5$</p> 
<p>7. $y = x + 7$</p> 	<p>8. $y = x - 4$</p> 	<p>9. $y = x + 5$</p> 	<p>10. $y = x - 3$</p> 
<p>11. $y = x + 1 - 4$</p> 	<p>12. $y = x - 3 + 2$</p> 	<p>13. $y = x - 1 - 3$</p> 	<p>14. $y = x + 2 + 1$</p> 
<p>15. $y = x + 1 + 5$</p> 	<p>16. $y = x - 2 + 2$</p> 	<p>17. $y = x - 4 - 2$</p> 	<p>18. $y = x + 5 - 1$</p> 